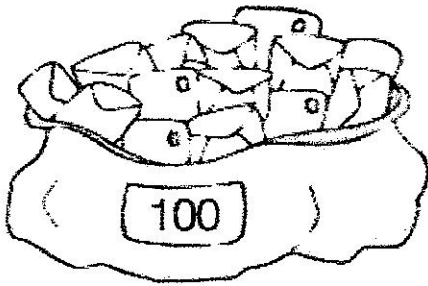



— Observa y completa.

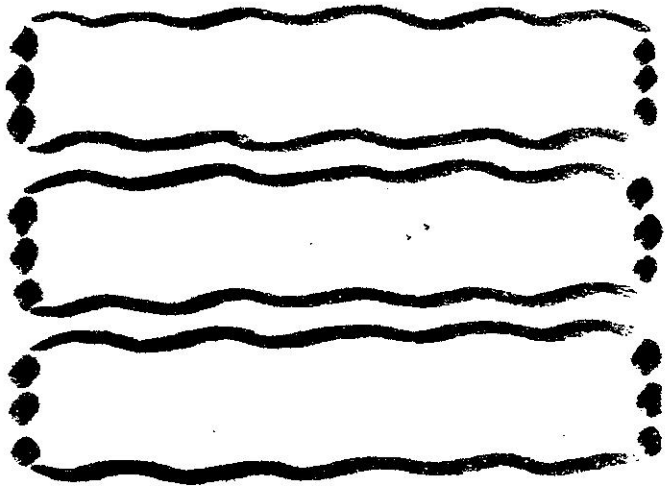



Hay unidades
que forman centena.



Hay decenas
que forman centena.

— Calcula el doble y dibuja.



— Completa.

$$2 + 2 + 2 = 2 \times \square = \square$$

$$2 + 2 + 2 + 2 = \square \times \square = \square$$

$$2 + 2 = \square \times \square = \square$$

$$2 + 2 + 2 + 2 + 2 + 2 = \square \times \square = \square$$